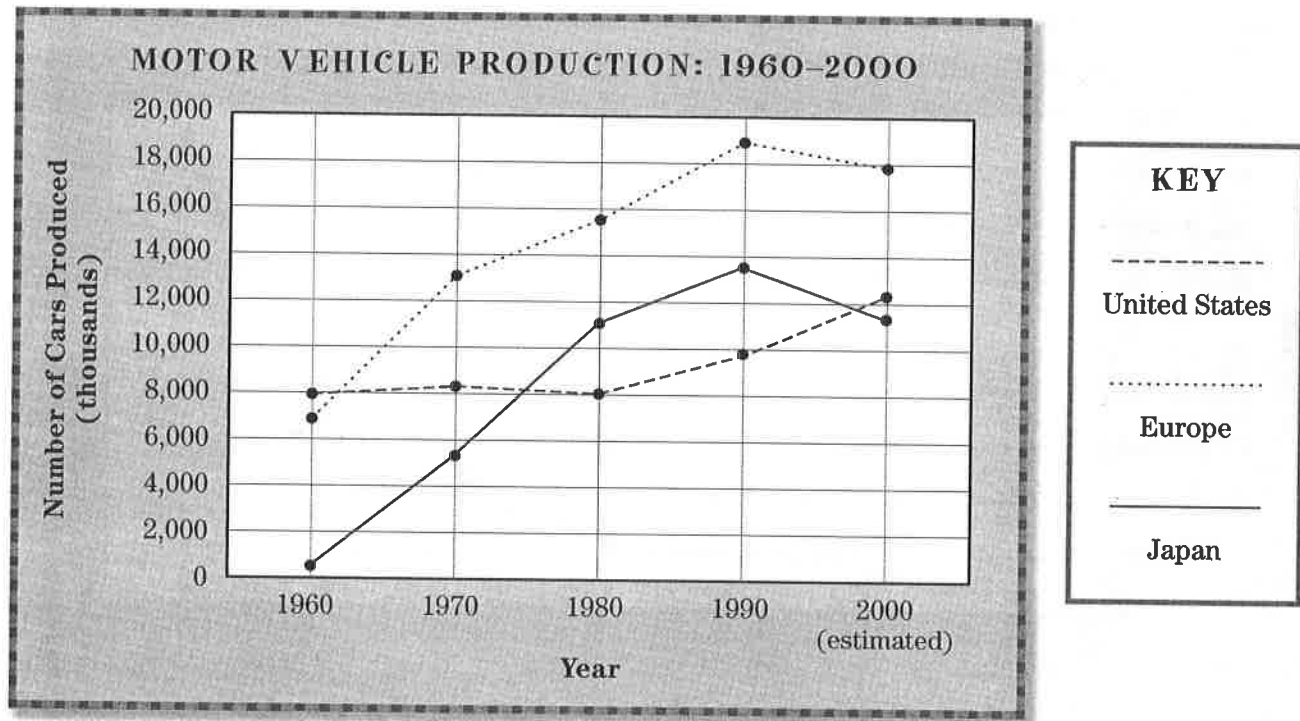


Name _____ Date _____

Fast Facts About Cars

This line graph shows the number of motor vehicles produced in different parts of the world from 1960 to 2000. Use the graph to answer the questions.



- 1 About how many motor vehicles were produced in Europe in 1970?

- 2 About how many vehicles were produced in the United States in 1980?

- 3 In 1980, how did vehicle production in Europe compare with vehicle production in the United States?

- 4 How has Japan's motor vehicle production changed since 1960?

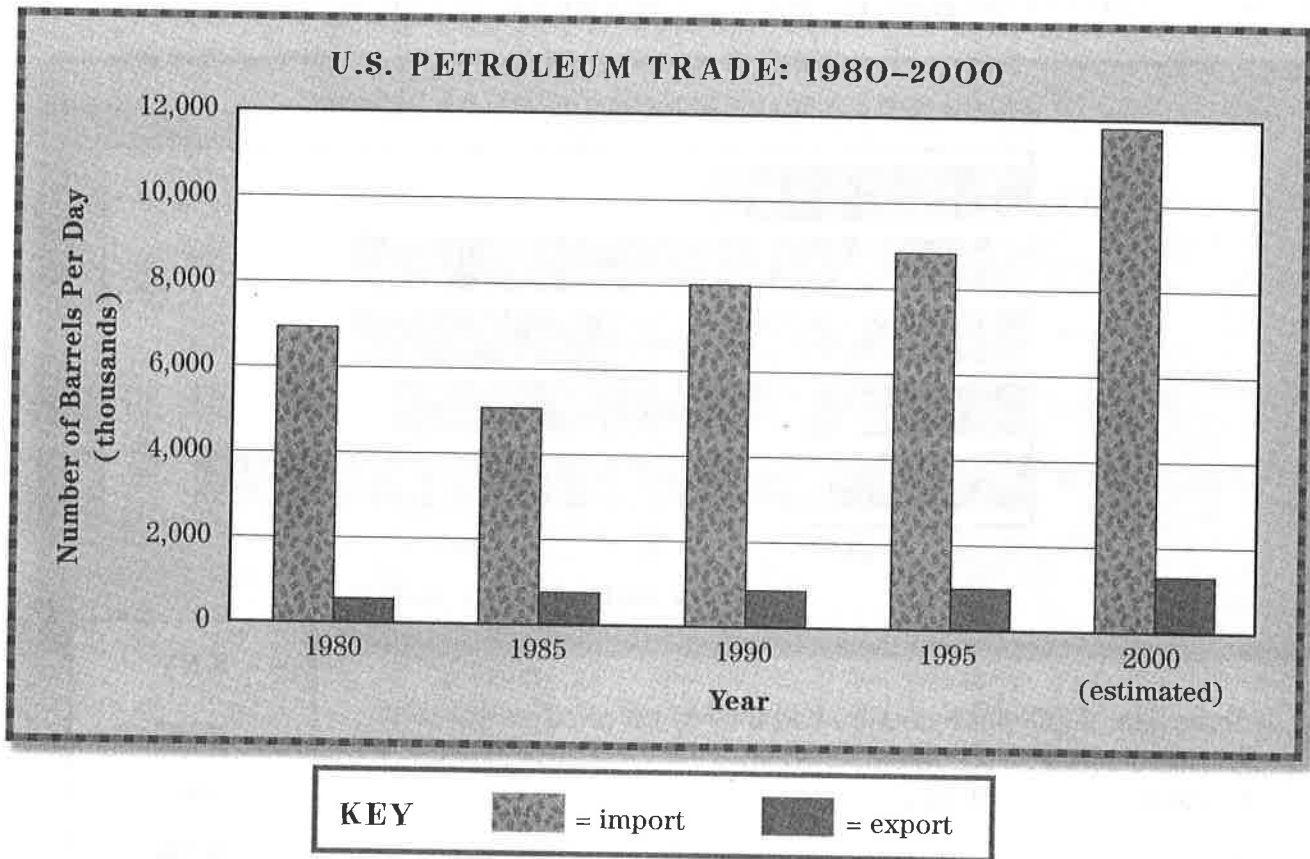
- 5 Write a sentence summarizing the changes in motor vehicle production from 1990 to 2000 in Japan, Europe, and the United States.

Name _____

Date _____

All About Oil

The bar graph below shows the differences in U.S. petroleum imports and exports from 1980 to 2000. Use the graph to answer the questions.



- 1 What general trend do you see in the number of barrels of petroleum imported by the United States each year?

- 2 What general trend do you see in the amount of petroleum exported by the United States each year?

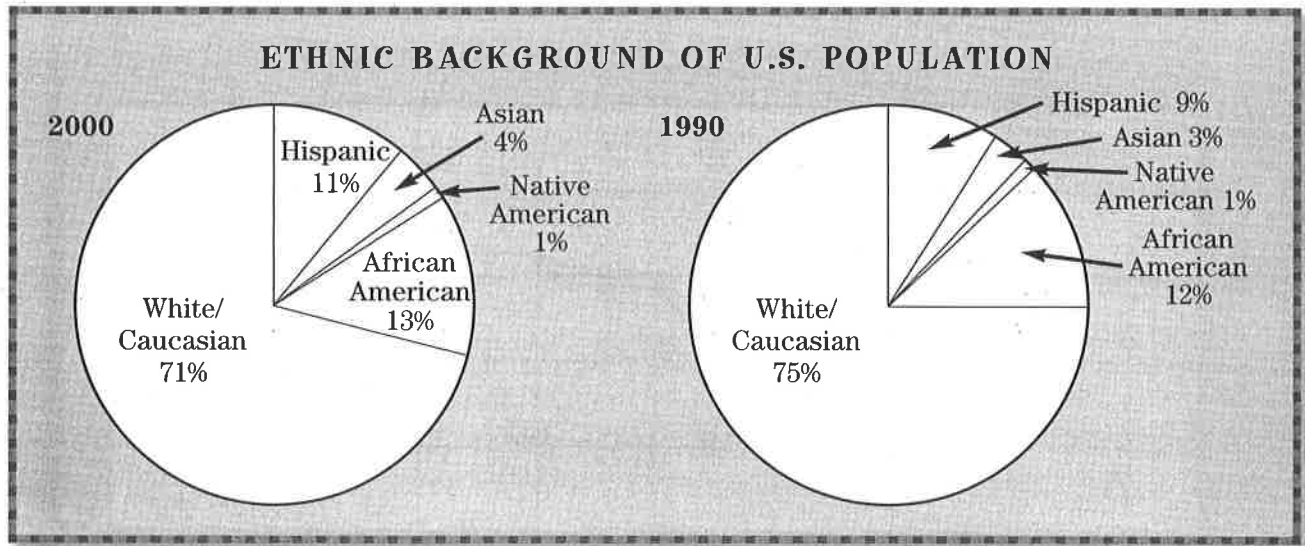
- 3 How closely do the figures for 1985 fit these two trends?

- 4 In general, how do U.S. petroleum imports compare with exports each year?

Name _____ Date _____

A Nation of Many Colors

The circle graphs below show estimated figures for the ethnic backgrounds of U.S. citizens in 2000 and 1990. Use the graphs to answer the questions.



- 1 Which was the smallest ethnic group in both years?

- 2 People of Asian background represented what percentage of the population in 2000?

- 3 In 1990, the total U.S. population was about 249 million. About how many people were African Americans?

- 4 Describe the changes that took place between 1990 and 2000.

- 5 Between 1990 and 2000, the total U.S. population increased from 249 million to about 280 million. What conclusion can you draw about the Native American population during the same time period?

